

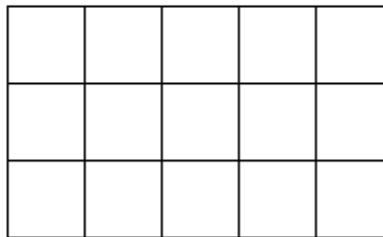
AREA Of Shape

Name : _____

Date: _____(March/Honesty)

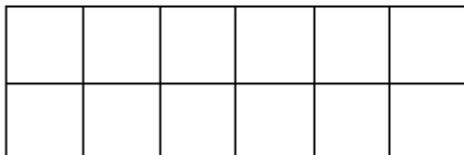
Grade : 3 (A - C)

To find the area of a rectangle, simply count the number of cm squares inside the rectangle. The area of the shape below is $5 \times 3 = 15$ square cm.

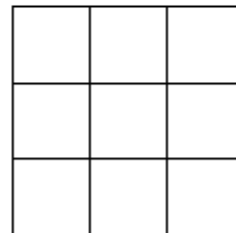


Work out the area of the following rectangles:

1)



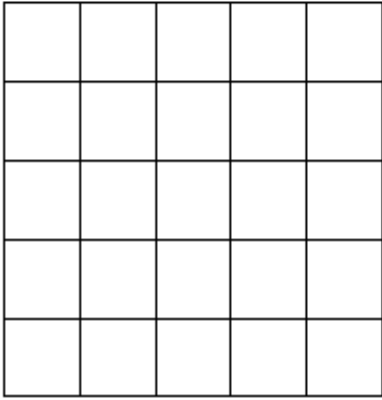
2)



Area = _____ square cm

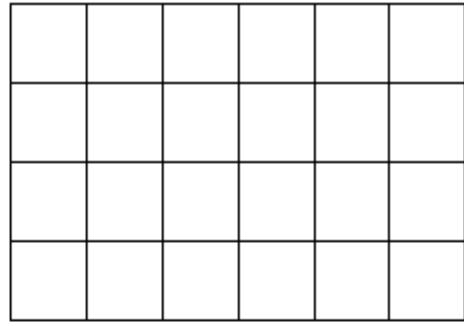
Area = _____ square cm

3)



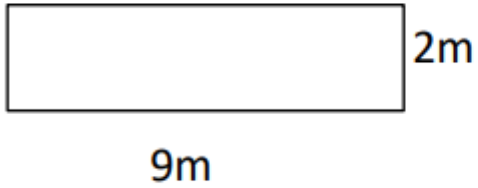
Area = _____ square cm

4)



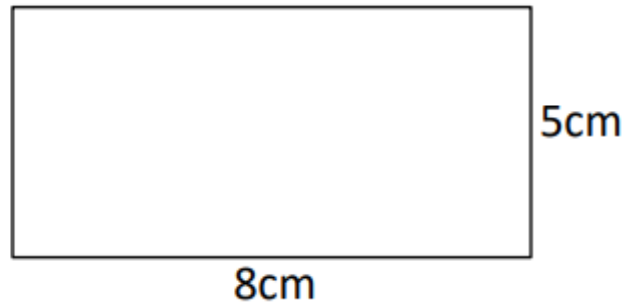
Area = _____ square cm

5)



Area = _____ square m

6)



Area = _____ square cm

Mrs. Ranim Zaidan